

Representing Fractions I

Pre Assessment

Name _____

Date _____ Class _____

For each problem below there is a bold outline around the whole figure.
Decide if the shaded part is equal to the fraction given.

1) Is the shaded

part $\frac{1}{4}$?

Yes

No



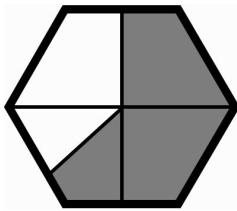
Explain your thinking.

2) Is the shaded

part $\frac{3}{5}$?

Yes

No



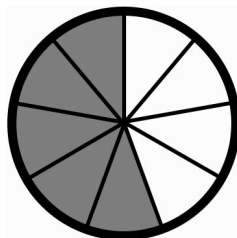
Explain your thinking.

3) Is the shaded

part $\frac{5}{9}$?

Yes

No



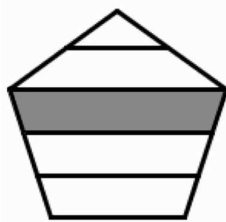
Explain your thinking.

4) Is the shaded

part $\frac{1}{5}$?

Yes

No



Explain your thinking.

